



# DAVID HARE PUBLIC SCHOOL

## Sample Questions

English

Std: 2

Name: ..... Admn. No. .... Time: 2½ hours F.M. 80

### Group-A

#### 1. Read the passage carefully and answers the following questions:

Bruno was Rajat's pet dog. Every afternoon as Rajat returned from school, Bruno greeted him. Its black eyes lit up with joy. It wagged its curved tail and followed him everywhere. Rajat took it to a nearby park every day. The pond in the park was Bruno's favourite playing spot. It liked to run after the ducks. One day, Rajat was not feeling well. Bruno lay awake near him. "I'll not be able to take you to the park today," he said to Bruno. Bruno was very sad. Rajat's parents took him to the doctor. "Take this medicine today," said the doctor. "Eat lots of fruits and vegetables too. You'll feel better soon." Rajat recovered quickly. He was able to take Bruno to the park again. Rajat's parents bought a new computer. Rajat was very happy to play games on the computer with his father. He forgot to take Bruno to the park.

#### (a) Read the sentences and write whether they are true (T) or false(F). 5×1=5

1. Every afternoon as Rajat returned from school, Bruno greeted him.
2. Bruno followed Rajat's father everywhere.
3. The road near the park was Bruno's favourite spot.
4. Rajat recovered quickly.
5. Rajat's parents bought a new computer.

#### (b) Put the correct options: 5×1=5

(i) Bruno was -

- Parul's pet dog.
- Rajat's pet dog.
- Mala's pet cat.

(ii) Every afternoon as Rajat returned from school, Bruno

- Meted him.
- Called him.
- greeted him.

(iii) The \_\_\_\_\_ in the park was Bruno's favourite playing spot.

- river.
- pond.
- lake.

(iv) One day, Rajat was not feeling \_\_\_\_\_.

- good.
- well.
- sad.

(v) " Take this medicine today," said \_\_\_\_\_

- the doctor.
- the nurse
- the staff

**(C) Match the column A and B :**

**1×5=5**

Column-A

Column-B

- |                                   |                                                |
|-----------------------------------|------------------------------------------------|
| (i) The pond in the park          | (a) to see Rajat unwell                        |
| (ii) Bruno's eyes lit up with joy | (b) to play games on the computer              |
| (iii) Bruno was very sad          | (c) I didn't take care of you!                 |
| (iv) Rajat was very happy         | (d) Bruno's favourite playing spot             |
| (v) Sorry Bruno!                  | (e) When it sees Rajat coming home from school |

**(D) Fill in the blanks:**

**1×5=5**

1. Bruno was Rajat's ..... dog.
2. Bruno wagged its..... tail and followed him everywhere.
3. The ..... in the park was Bruno's favourite playing spot.
4. Rajat's parents took him to the .....
5. Rajat's parents bought a new .....

pond, pet, Curved, doctor, Computer

**(E) Answers the following questions:**

**2×5=10**

1. How did Bruno show his love for Rajat?

Ans:

2. How did Bruno feel when Rajat was unwell?

Ans:

3. What did the doctor suggest Rajat to become well?

Ans:

4. What did Rajat use to do on the computer?

Ans:

5. What did Bruno decide then?

Ans:

**2. Read the passage carefully and answers the following questions:**

Hitesh lost another tooth. He held the tooth in his hand. "What should I do with this tooth?" He thought. Last time when Hitesh had lost his tooth, he had put the tooth under his pillow for the Tooth Fairy. She came and took his tooth. She had left a toy car for him. Hitesh had wanted to see her but he had fallen asleep. "This time I am going to see the Tooth Fairy. I am putting my tooth under my pillow. I will stay awake all night if I have to. I'll just lie here and wait," Hitesh said to himself. Suddenly he heard the fluttering wings. He saw a sparkle of light. "Hello, Tooth Fairy," jumped Hitesh. thought you would be asleep, "the Tooth Fairy said in a voice that sounded like tiny bells." I want to thank you for the toy car you left for me last time. I stayed awake tonight because I wanted to see you. No one ever sees the Tooth Fairy, "said Hitesh. The Tooth Fairy smiled and said," Many children just like you, do see me. They just don't remember. "Why don't they remember?" Hitesh wanted to know.

"Tooth Fairies create magical fairy dust. Just before we leave, we sprinkle it over the children's eyes. So they forget," told the Tooth Fairy. "Fairy dust! What is that? What else can it do?" Asked Hitesh. "It gives sweet dreams too," replied the Tooth Fairy. "Since it is magical, it does many good things. Fairies of all kinds use fairy dust to create magic." Can you please tell me something more about fairy dust? "Hitesh asked out of curiosity. She smiled again." We go all over the world and collect children's teeth that are left under pillows and leave something in return. Then we take these teeth back to Fairyland, and make them into fairy dust. "But, teeth aren't magical," Hitesh said.

**(a) Answers the following questions:**

**3×5 =15**

1. What did Hitesh do with his first tooth?

Ans:

2. Why couldn't Hitesh see the tooth fairy when she came first time?

Ans:

3. What did Hitesh decide to do to see the tooth fairy?

Ans:

4. How was the voice of tooth fairy sounded to Hitesh?

Ans:

5. What did Hitesh say when he met the tooth fairy first time?

Ans:

**(b) Read the sentences and write whether they are true (T) or false(F). 5×1=5**

(i) Hitesh had met the Tooth Fairy earlier.

(ii) The Tooth Fairies sprinkle water over the children's eyes.

(iii) The magical fairy dust gives sweet dreams to the children.

(iv) The children's teeth keep becoming more magical with every word.

(v) He thanked the Tooth Fairy for the toy car that she had left for Him.

**(C) Put the correct options:**

**5×1=5**

1. Last time when Hitesh had lost his tooth, he had put the tooth under his

- (a) bed (b) chair  
(c) pillow (d) none of these

2. Who came and took Hitesh's tooth?

- (a) Hitesh's aunt (b) Hitesh's maid  
(c) Tooth Fairy (d) Magical Fairy

3. Just before we leave, we sprinkle it over the children's

- (a) eyes (b) ears  
(c) hands (d) face

4. Everytime you ....., you store a little magic in your teeth.

- (a) cry (b) fight  
(c) laugh (d) smile

5. Is Hitesh's tooth a very happy tooth?

- (a) Yes (b) No

## Group-B (Grammar)

**1. Fill in the blanks with a / an / the:**

**5×1=5**

- (i) \_\_\_\_\_ orange. (ii) \_\_\_\_\_ sun, (iii) \_\_\_\_\_ lion, (iv) \_\_\_\_\_ umbrella  
(v) \_\_\_\_\_ one rupee note.

**2. Match the following:**

**5×1=5**

Column-A	Column-B
eat	noun
hospital	pronoun
He/she	adjective
sad	preposition
in	verb

**3. Make sentences with the following words:**

**3×2=6**

- (i) Park: \_\_\_\_\_  
(ii) Car: \_\_\_\_\_  
(iii) River: \_\_\_\_\_

**4. Change the sentences into negative ones:**

**2×2=4**

- (i) We are going to school.

Ans: \_\_\_\_\_

- (ii) He is tall.

Ans: \_\_\_\_\_

**5. Write a paragraph: My best friend:**

**10**





# DAVID HARE PUBLIC SCHOOL

## Sample Questions

Hindi

Std:2

Student Name: ..... Admn. No. .... Time: 2.5 Hours F.M. 80

### A. उचित वाक्यों के सामने सही (✓) का निशान लगाएँ।

(Tick the correct statements)

4×1=4

- (क) काले बादल अपने साथ पानी लाते हैं।  
(ख) बादल सभी जगह गरजते हुए जाते हैं।  
(ग) बादल जहाँ भी जाते हैं, वहाँ कोयल गाती है।  
(घ) बादल सबके जीवन में खुशियाँ बिखराते हैं।

### B. कौन क्या कहलाता है? बताइए—

नभचर उभयचर थलचर

- (क) जल में रहने वाले प्राणी - जलचर 4×1=4  
(ख) थल पर रहने वाले प्राणी - .....  
(ग) नभ में रहने वाले प्राणी - .....  
(घ) जल-थल दोनों में रहने वाले प्राणी - .....

C. देखिए और बताइए, ये जानवर कहाँ रहते हैं—

8×2=16

पेड़ गौशाला गुफ़ा पानी बिल घोंसला छत्ता अस्तबल

(क)



.....

(ख)



.....

(ग)



.....

(घ)



.....

(ङ)



.....

(च)



.....

(छ)



.....

(ज)



.....

C. रिक्त स्थान भरिए।

5×2=10

(Fill in the blanks)

- (क) मछली सुंदर और \_\_\_\_\_ थी।  
(ख) मेंढक और मछली अच्छे \_\_\_\_\_ बन गए।  
(ग) मन करता है कि मैं भी तुम्हारी तरह ज़मीन पर \_\_\_\_\_।  
(घ) पानी में पहुँचते ही \_\_\_\_\_ की जान में जान आई।  
(ङ) मछली पानी के बिना \_\_\_\_\_ नहीं रह सकती।

Hints :

गोल-मटोल उछलूँ-कूदूँ मित्र जीवित मछली



D. एक के अनेक बनाइए-

5×2=10

- |                  |                   |
|------------------|-------------------|
| (क) ऋतु - ऋतुएँ  | (ख) नाव - .....   |
| (ग) डाली - ..... | (घ) पत्ता - ..... |
| (ङ) झरना - ..... | (च) कहानी - ..... |

E. नीचे दिए गए वाक्यों में सही स्थान में पूर्ण विराम (।) लगाइए-

4×2=8

- (क) मुनमुन एक नन्ही-सी लड़की थी
- (ख) कछुए और घोंघे के साथ दौड़ लगाओ
- (ग) मुझसे मुक़ाबला करके देख लो
- (घ) मुनमुन को मन ही मन गुस्सा आ रहा था



F. निम्नलिखित प्रश्नों के उत्तर लिखिए-

4×3=12

(क) मेंढक को देखकर मछली के मन में क्या इच्छा जागी?

.....  
.....

(ख) मेंढक की नकल करने पर मछली का क्या हाल हुआ?

.....  
.....

(ख) बादल सबके जीवन में क्या बिखराते हैं?

.....  
.....

(ग) धरती बादलों को क्यों बुलाती है?

.....  
.....

G. किसने कहा, किससे कहा, लिखिए—

4×3=12

(क) मन करता है कि मैं भी तुम्हारी तरह ज़मीन पर उछलूँ-कूदूँ।

.....  
.....

(ख) तुम भूलकर भी ज़मीन पर आने की मत सोचना।

.....

(ग) पेड़ जानवरों की सहायता कैसे करते हैं?

.....  
.....

(घ) जंगल फिर से हरा-भरा कैसे हो गया?

.....  
.....

H. निम्नलिखित प्रश्नों के उत्तर लिखिए—

4×1=4

(क) बादल अपने साथ किसे लेकर आते हैं?

.....  
.....



# DAVID HARE PUBLIC SCHOOL

## Sample Questions

BENGALI

Std:2

Student Name: ..... Admn. No. .... Time: 2.5 Hours F.M. 80

১. ‘আসলকথা’ কবিতাটির কবির নাম সহ প্রথম চার লাইন মুখস্ত লিখো :৮

উত্তর:

২. নিম্নলিখিত প্রশ্নগুলির সঠিক উত্তর লিখ:

(i) ‘আমাদের গ্রাম’ কবিতায় কবির নাম কি? গ্রামের ঘরসাধারণত কেমন হয়?

গ্রামখানি মায়ের সমান কেন?

(১+১+৪=৬)

উত্তর:

(ii) মেলা কাকে বলে? মেলায় কি হয় ? মেলা কখন ওকোথায় হয়? জলসত্র কি?

(২+২+২=৬)

উত্তর:

(iii) বৈদ্যনাথএর বাড়ি কোথায় ? তার কি অভ্যাস ছিল? তার ছেলে ও মেয়ের নাম কি ? তার কাম্য কি ছিল?

(১+১+২+২=৬)

উত্তর:

(iv) গ্রামের মাঠে কি আছে? চাঁদের কিরণ লেগে কি ঝিকমিক করে? রবি কোন দিকে ওঠে ? কখন পাখি ডাকে ওবায়ু বয়?

(২+১+১+৩=৭)

উত্তর:

(v) অর্ক কাগজ দিয়ে কি করে ? ওর দাদা কোন শ্রেণীতে পড়ে?

বর্ষার পথ কিরূপ হয় ? ওর মায়ের নাম কি?

(১+১+৩+১=৬)

উত্তর:

(vi) বর্ষাকালের বর্ণনা দাও . বর্ষাকালে তুমি কি কি করো. (৩+৩=৬)

উত্তর:

৩. অর্থলেখ:

(৬ × ১ = ৬)

আশ্রয়: \_\_\_\_\_, স্বদেশ: \_\_\_\_\_, দুরন্ত: \_\_\_\_\_,

কন্যা: \_\_\_\_\_, নিরোধ: \_\_\_\_\_, তৃষ্ণা: \_\_\_\_\_

৪. বিপরীতঅর্থলেখ :

(৬ × ১ = ৬)

কান্না : \_\_\_\_\_, খুশি: \_\_\_\_\_, আসল : \_\_\_\_\_,

রাজা: \_\_\_\_\_, শান্ত: \_\_\_\_\_, মিঠে: \_\_\_\_\_.

৫. বাক্যরচনাকরো:

(২ x ৭=১৪)

শিশু: \_\_\_\_\_

নৌকা: \_\_\_\_\_

বিশ্ব: \_\_\_\_\_

চাঁদ: \_\_\_\_\_

ভাই: \_\_\_\_\_

পদ্ম: \_\_\_\_\_

৬. ফাঁকা ঘরে ব-ফলা যুক্ত বর্ণ বসাতো :

(১ x ৭=৭)

	দে	শ
--	----	---

	জ	ন
--	---	---

	শু	র
--	----	---

	গ	ত
--	---	---

আ		দ
---	--	---

ম	ম	
---	---	--

বি	প	
----	---	--



# DAVID HARE PUBLIC SCHOOL

## Sample Questions

Mathematics

Class: II

Student Name: ..... Adm. No. .... Time: 2.5 Hours F.M. 80

### 1. Tick the correct option:

5x1=5

a) 342 is greater than

- i) 432                  ii) 324                  iii) 348

b)  $18 + 10 =$

- i) 28                  ii) 29                  iii) 19

c)  $50 \times 0 =$

- i) 500                  ii) 20                  iii) 0

d) 1 Hour = \_\_\_\_\_ minutes.

- i) 30                  ii) 120                  iii) 60

e)  $999 \div 9 =$

- i) 111                  ii) 45                  iii) 9

### 3. Do as directed: -

a) Write in words:

4 x 2 = 8

i) 210 = \_\_\_\_\_

ii) 502 = \_\_\_\_\_

iii) 500 = \_\_\_\_\_

iv) 301 = \_\_\_\_\_

b) Fill in the blanks:

4x1=4

i) A period of \_\_\_\_\_ days is known as a fortnight.

ii) The month after October is \_\_\_\_\_.

iii) A leap year comes every \_\_\_\_\_ years.

**c) Find the product: -**

$$4 \times 3 = 12$$

**i)**

5	5	8
×		5
-----		

**ii)**

4	2	3
×		9
-----		

**iii)**

9	5	0
×		7
-----		

**iv)**

9	5	1
×		5
-----		

**d) Find the sum:**

$$3 \times 3 = 9$$

**e) i)**

8	7	6
+5	9	8
-----		

**ii)**

9	7	4
+6	8	0
-----		

**iii)**

8	4	6
+	8	0
-----		

**f) Arrange in columns and then subtract:  $2 \times 3 = 6$**

**i)**

3	5	8
-2	1	2
-----		

**ii)**

8	0	5
-2	8	9
-----		



**3.) Solve the word problems:**

$$2 \times 5 = 10$$

a) 346 people came to visit a national park on Saturday. 459 came on Sunday. How many people in all visited the national park ?

Ans:

b) Nikita's teacher brought 35 bundles of pencils to class. There are 6 pencils in each bundle. How many pencils are there altogether?

Ans:

**4.a) Match the following:**

$$5 \times 1 = 5$$

- i) 340
- ii) 139
- iii) 710
- iv) 215
- v) 120

- 1) One Hundred and Twenty
- 2) Two Hundred and Fifteen
- 3) Three Hundred Forty
- 5) Seven Hundred and Ten
- 6) One Hundred and Thirty-Nine

**b) Write in expanded form:**

$$6 \times 2 = 12$$

i)  $301 =$

ii)  $254 =$

iii)  $321 =$

iv)  $851 =$

v)  $3025 =$

vi)  $8521 =$

**c) Write in short form: -  $4 \times 1 = 4$**

i)  $300 + 20 + 2 =$

ii)  $700 + 00 + 6 =$

iii)  $500 + 80 + 7 =$

iv.)  $3000 + 500 + 40 + 1 =$

**d) Write in Ascending order: -**

$$2.5 \times 1 = 2.5$$

(i)  $352, 458, 748, 584 =$

(ii)  $854, 874, 201, 524 =$

**e) Write in Descending order:**

$$2.5 \times 1 = 2.5$$

(i)  $965, 214, 625, 854 =$

(ii)  $205, 847, 251, 650 =$





# DAVID HARE PUBLIC SCHOOL

## Sample Questions

Science

Std:2

Student Name: .....Admn. No. .... Time: 2.5 Hours F.M. 80

### A. Choose the correct options: $10 \times 1 = 10$

1. Which of these plants is a herb?

- a) money plant b) grapevine c) garden mint d) rose

2. Lotus and hydrilla are

- a) herbs b) aquatic plants c) shrubs d) trees

3. Which of these is not a kind of plant?

- a) herb b) creeper c) tree d) trunk

4. A plant that grows along the ground is called

- a) creeper b) climber c) herb d) shrub

5. Most trees are \_\_\_\_ in colour

- a) white b) green c) orange d) brown

6. Which of these is an example of a spice?

- a) pepper b) coffee c) tea d) walnut

7. Wheat, rice and maize are all types of

- a) pulses b) vegetables c) fruits d) cereals

8. Quinine, which is obtained from the bark of the cinchona tree, is used to treat

- a) malaria b) jaundice c) cold d) none of the above

9. Perfumes are obtained from

a) nuts b) fruits c) seeds d) plants

10. Which of these is NOT an endangered animal?

a) panda b) deer c) tiger d) great Indian bustard

**B. Write True or false: 10×1=10**

1. A parrot can imitate human speech.
2. Honey and wax is obtained from beehives.
3. Leather is used to make silk clothes.
4. Dogs are called beasts of burden.
5. A camel is called the 'Ship of the Desert'.
6. The cotton clothes we wear are made from fibre obtained from sheep.
7. Bamboo is the tallest grass and fastest growing plant.
8. Plants give us carbon dioxide to breathe.
9. Tyres and some toys are made of rubber.
10. A bunch of flowers tied together is called a bouquet.

**C. Short answer type questions (one sentence): 10×2=20**

1. What is a trunk?

Ans-

2. What kind of plants offer us shade?

Ans-

3. What kinds of plants are seasonal?

Ans-

4. What is chocolate made from?

Ans-

5. Name a few plant seeds that are edible.

Ans-

6. Name two plants that give us drink.

Ans-

7. Name two plants that give us foodgrains.

Ans-

8. From which animals do we get wool?

Ans-

9. How are silk clothes made?

Ans-

10. What is a joint?

Ans-

**D. Short answer type questions (two sentence): 10×3=30**

1. What is the difference between a kutch house and a pucca house?

Ans:

2. What are the different kinds of plants, based on size and type of stems?

Ans:

3. Give examples of herbs, shrubs and trees.

Ans:

4. Why are plants important?

Ans:

5. Which vegetables are roots, stems or leaves of plants?

Ans:

6. What are wild animals?

Ans:

7. What are the various products that can be made using plants?

Ans:

8. Which kind of animals help to keep the jungle clean?

Ans:

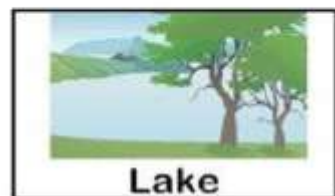
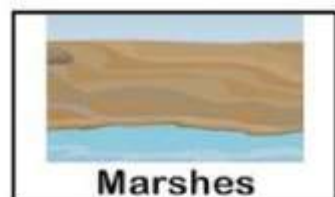


9. Give a few examples of small wild animals.

Ans:

10. What are domestic animals?

Ans:

**E. Match the animals with their homes: 10**





# DAVID HARE PUBLIC SCHOOL

## Sample Questions

SST (Social Studies)

Std:2

Student Name: ..... Admn. No. .... Time: 2.5 Hours F.M. 80

### A. Choose the correct options:

10×1=10

1. Where do we go when we get hurt?
  - A. Hospital
  - B. Post office
  - C. Police station
  - D. Supermarket
2. What is Walmart?
  - A. Hospital
  - B. Supermarket
  - C. Restaurant
  - D. Hotel
3. Which place helps check the law-and-order situation in every neighbourhood.
  - A. Hospital
  - B. Fire station
  - C. Police station
  - D. Clinic
4. Where can we keep our money and valuables safely?
  - A. Bank
  - B. Airport
  - C. Railway station
  - D. Car park
5. Where do we go if we want to buy an envelope?
  - A. Green grocer's
  - B. Grocery shop
  - C. Cinema hall
  - D. Post office



6. Which one is not a spice?
- A. Cumin seeds
  - B. Ginger
  - C. Clove
  - D. Maize
7. Which of the following is energy-giving food?
- A. Eggs
  - B. Milk
  - C. Potato
  - D. Soybean
8. Which of the following is a bodybuilding food?
- A. Cereals
  - B. Sugar
  - C. Potatoes
  - D. Eggs
9. Pick one vegetable that can be eaten raw.
- A. Onion
  - B. Bottle gourd
  - C. Brinjal
  - D. Bitter gourd
10. What is the first meal of our day?
- A. Lunch
  - B. Dinner
  - C. Breakfast
  - D. Snack time

**B. Write 'T' for true or 'F' for false:**

**10×1=10**

- 1. Neighbours help each other during times of trouble.
- 2. We must learn to live peacefully with our neighbours.
- 3. We must throw all our garbage on the street.
- 4. We should not make too much noise while playing in our locality.
- 5. We must get into a brawl with our neighbours.
- 6. An electrician installs the air conditioner in our homes.



7. A door is placed at the entry of a house.
8. We should always ask for permission when entering someone's room.
9. A window is an opening in the walls of a house.
10. The sheet of glass fitted in a window is called a windowpane.

**C. Fill in the blanks:**

**10×1=10**

single parent, three, Lunch, survive, Water, grow, Paternal, Cousin, paternal uncle, maternal

1. We must have \_\_\_\_\_ meals a day.
2. \_\_\_\_\_ is the second meal of our day.
3. \_\_\_\_\_ helps flush toxins from our body.
4. Food is required by all things to \_\_\_\_\_ .
5. We need food to \_\_\_\_\_ .
6. The brother of our father is also called \_\_\_\_\_ .
7. Our aunt's son is our \_\_\_\_\_ brother.
8. Relatives on the mother's side of the family are called \_\_\_\_\_ relatives.
9. Relatives on the father's side of the family are called \_\_\_\_\_ relatives.
10. A family with only one parent is called a \_\_\_\_\_ family

**E. Match the column:****10×1=10**

<b>Column-A</b>	<b>Column-B</b>
1. Grandma Grandpa	a. Family with 6 Members
2. Mother father	b. Name shared by all Family members
3. Paternal Relative	c. Children of our uncles and aunts
4. Maternal Relatives	d. Children from the same parent
5. Aunt	e. Small family
6. Cousins	f. Parents
7. Siblings	g. Grand parents
8. Surname	h. Father's sister
9. Nuclear Family	i. Relatives on mother's side
10. Big Family	j. Relatives on father's side

**F. Answers the following questions (within one word):****5×2=10**

1. Where do we study different subjects?

Ans:

2. Which room in the school has many books?

Ans:

3. Who takes care of the library?

Ans:

4. Where do we buy pencils, erasers, and charts from?

Ans:

5. Where do we buy fruits and vegetables from?

Ans:

**G. Answers the following questions (within two sentences): 10×3=30**

1. What is a floor?

Ans:

2. What is a roof?

Ans:

3. Name some food items we obtain from animals.

Ans:

4. Name some foods we get from plants.

Ans:

5. Name some cereals.

Ans:

6. What is a library?

Ans:

7. Who was Dr. Sarvapalli Radhakrishnan?

Ans:

8. What is a school?

Ans:

9. What is a drainage system?

Ans:

10. What is the benefit of drinking water?

Ans:





# DAVID HARE PUBLIC SCHOOL

## Sample Questions

### Computer

### Std-II

Student Name: ..... Roll No. .... Time: 1 Hour, F.M. 50

#### A. Put a tick (✓) on the correct answer. [5 × 1 = 5]

- Which of these is a processing device?  
(a) CPU (b) Joystick  
(c) Web camera (d) Monitor
- Which of these is an input device?  
(a) Monitor (b) Speakers  
(c) Microphone (d) Headphones
- Which of these is obtained from a monitor?  
(a) soft copy (b) hardcopy  
(c) photograph (d) none of these
- We get hardcopy from a  
(a) monitor (b) speakers  
(c) printer (d) Headphones
- Which of these storage devices is smallest in size?  
(a) CD (b) DVD  
(c) Hard disk (d) Pen drive

Ans.:

1.            2.            3.            4.            5.

**B. Match the column.**

**[5 × 1 = 5]**

<b>Column-A</b>	<b>Column-B</b>
(a) Largest key	(i) Input device
(b) Mouse	(ii) Power supply
(c) SNPS	(iii) Space
(d) Monitor	(iv) Storage device
(e) Pen drive	(v) Output device

**C. Fill in the blanks using the correct words from the help box.**

**[5 × 1 = 5]**

**Help Box :**easier,computer, orders, mistakes, reliable

1. A computer is an electronic machine which makes our work..... and faster.
2. A computer never makes .....
3. We cannot work as fast as a .....
4. We do not need ..... from outside to do a job all the time.
5. Computer is a ..... machine.

**D. Write 'T' for True or 'F' for False in the space provided.**

**[5 × 1 = 5]**

1. A computer is similar to us in many ways.
2. We can work as fast as a computer.
3. A computer sometimes makes mistake.
4. We can think and take our own decisions.
5. Data or instruction entered into a computer is called the input.

**E. Answers the following questions: [5 × 2 = 10]**

1. What is keyboard?

Ans:

2. Name two input devices.

Ans:

3. How many functional keys are on a computer keyboard:

Ans:

4. How many keys are on a computer keyboard?

Ans:

5. What is desktop?

Ans:

**F. Answers the short cut keys:**

**[4 × 1 = 4]**

1. Ctrl+A =
2. Ctrl+B =
3. Ctrl+C =
4. Ctrl+V=

**G. Label the diagram:**

**[8 × 2 = 16]**

