



DAVID HARE PUBLIC SCHOOL

Sample Questions

English

Nursery

Student Name: Adm. No. Time: 2.5 Hours, F.M. 80

1. Write 'A' to 'F' letters.

6

2. Match letter to letter.

5x1=5

L

G

G

M

M

L

S

U

U

S

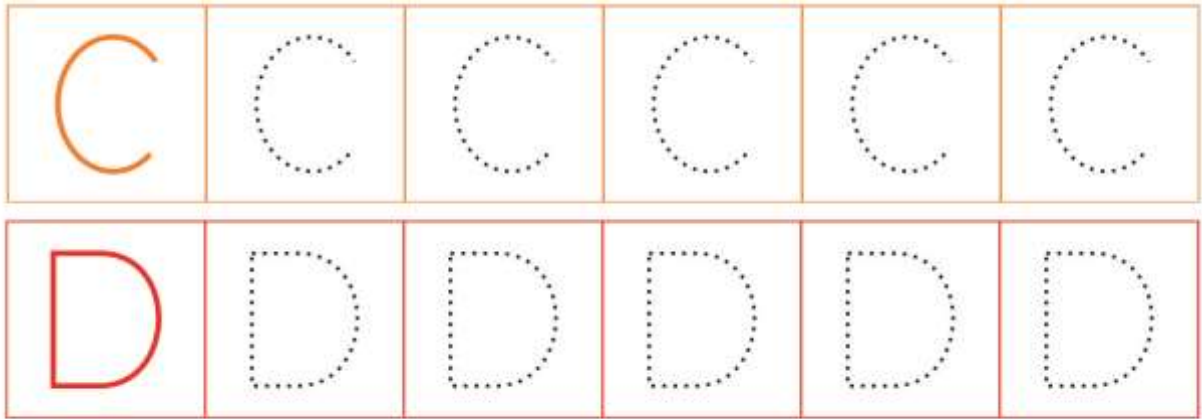
3. Write the first letters of the each picture.

10x2=20



4. Trace the letters:

5x2=10



5. Look at the objects on the left and match them to the correct words: 6



Cat



Apple



Balloon

6. Match the pictures with 1st letters. 8 x 2 =16



• S

• A

• C

• F

• D

• B

• E

• L

7. Identify the letters and circle them.

6×2=12

A B E H A I R

K A C K D H J

O I Q P R M O

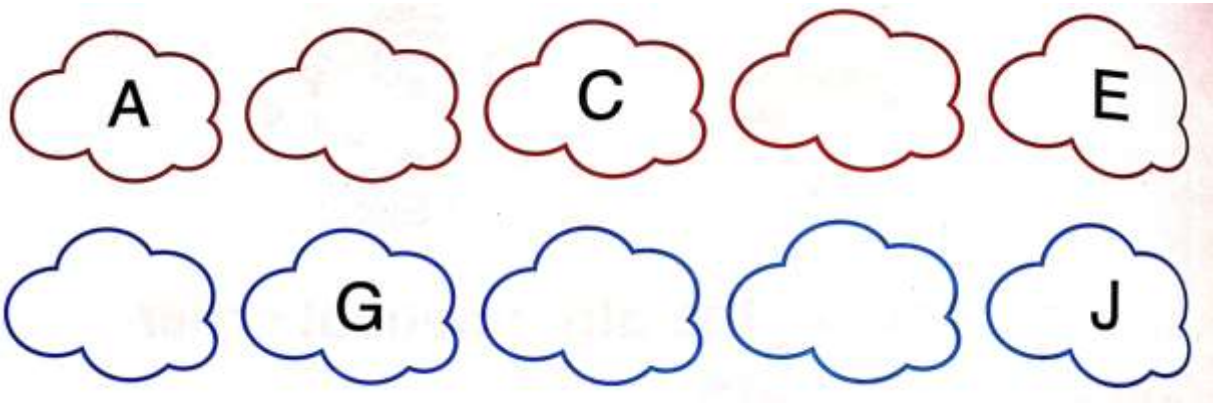
Q C H Q M P R

D A D B H K L

R H K R L O P

8. Match the missing letters.

5





DAVID HARE PUBLIC SCHOOL

Sample Questions

Bengali

Nursery

Student Name: Roll No. Time: 2.5 Hours, F.M. 80

১. অ থেকে ঔ পর্যন্ত লেখ : ২০

উ: _____

২. মিল বর্ণে - গোল চিহ্ন দাও: ১০

উ: ফ ব ম উ র প
ই: ল চ ব ভ ঝ ই
এ: ট এ ঢ ণ ল জ
অ: জ ব চ ঝ অ ঝ
ঊ: ণ উ জ ম য র

৩. অমিল বর্ণে - গোল চিহ্ন দাও: ১০

এ: এ ঙ্গ এ য র এ
ই: ই ই ব ই ঝ ই
অ: অ ঠ অ ণ অ অ
আ: আ ব আ আ আ এ
ঈ: ম ঙ্গ ম ঙ্গ ঙ্গ ট

৪. আগের বর্ণ লেখ :

১০

এ, হে, আ, ডে, ঙ্গ.

৫. পরের বর্ণ লেখ :

১০

এ , উ , আ , অ , ঙ্গ

৬. বামদিকের বর্ণ দেখিয়ে ডানদিকের বর্ণ মেলাও:

১০

বামদিক

ডানদিক

আ
ই
ঙ
অ
ঙ্গ

হ
ঙ
ঙ
অ
আ

৭. ছবি দেখে প্রথম বর্ণ মেলাও :

১০

হ



অ



আ



ঙ



ডে





DAVID HARE PUBLIC SCHOOL

Sample Questions

Mathematics

Nursery

Student Name: Roll No. Time: 2.5 Hours, F.M. 80

1. Trace the curved lines:

$4 \times 2\frac{1}{2} = 10$



2. Write the below Numbers:

$5 \times 2 = 10$

1				
3				
4				
7				
9				

3. Write the numbers from 1 to 10:

$5 \times 1 = 5$

4. Write the after numbers (One is done for you):

$5 \times 1 = 5$

6	8	2		9	
7		3		1	

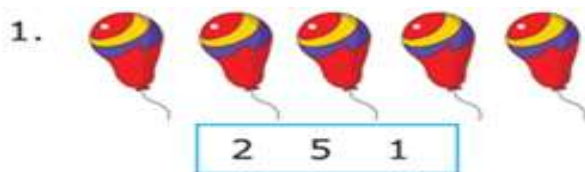
5. Write the between numbers (One is done for you):

$5 \times 1 = 5$

7	8	9	3		5	8		10
2		4	6		8	1		3

6. Count and circle the correct numbers:

$5 \times 1 = 5$



7. Match the pictures with numbers (One is done for you): $5 \times 3 = 15$



10



7



2




3



5



6



8. Count and write (One is done for you):

$1\frac{1}{2} \times 10 = 15$



 = 4	 =	 =
 =	 =	

9. Write the missing numbers:

$5 \times 2 = 10$

3		5		7	



DAVID HARE PUBLIC SCHOOL

Sample Questions

Alphabet

Nursery

Student Name: Roll No. Time: 2.5 Hours, F.M. 80

1. Write the letters 'E' and 'F' in the boxes:

8×2=16

E									
----------	--	--	--	--	--	--	--	--	--

F									
----------	--	--	--	--	--	--	--	--	--

2. Answers the following questions:

5×2=10

● Ball starts with which letter?

- H U
 E B



● Frog starts with which letter?

- F L
 V Q



● Which letter is this?

- R T
 F Q



● Hen starts with which letter?

- P D
 H Y



● Which letter is this?

- Y V
 L G



3. Match the pictures with their names (One is done for you): $6 \times 3 = 18$



● Egg

● Apple

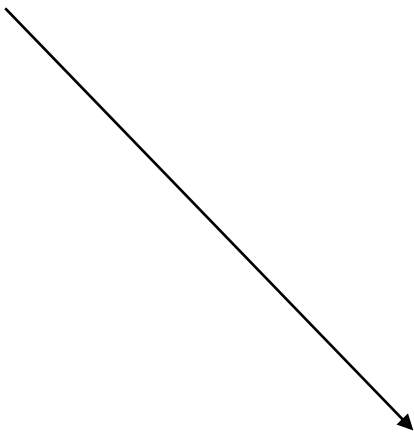
● Peacock

● Hat

● Ball

● Orange

● Ball



4. Look at the alphabet in the first column. Circle the picture which begins with the alphabet: 6x3=18

M			
N			
O			
P			
Q			
R			

5. Connect the alphabet with 'C' and 'D' with the matching pictures:
4 x 2 = 8



6. Write first letter of each picture:

5 x 2 = 10

